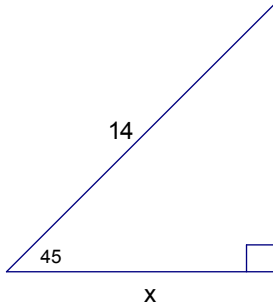


Math 10 Quiz

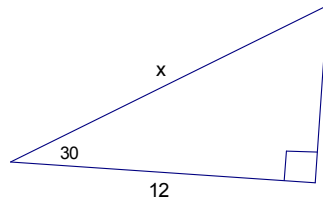
/5

Name _____

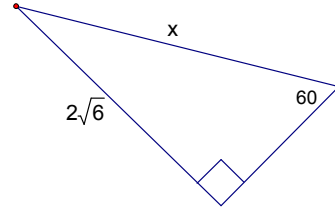
1. Determine the *exact* value of x . Simplify your answer.



a) $x =$ _____

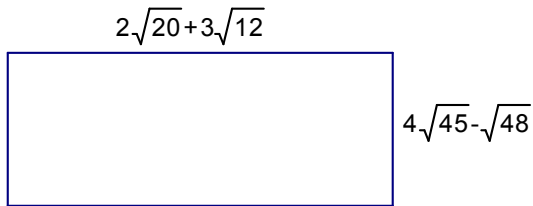


b) $x =$ _____

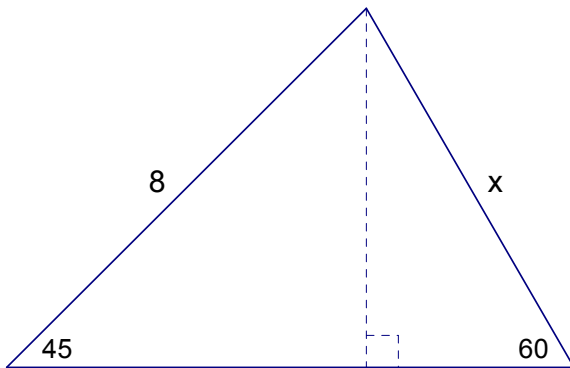


c) $x =$ _____

2. Determine the *exact* perimeter of the following rectangle. Simplify your answer.



3. Determine the *exact* value of x . Simplify your answer.



$x =$ _____